

Written examination

TIN172/DIT410, Artificial Intelligence

Contact person: Peter Ljunglöf, 0736–24 24 76

27 May 2014, 14:00–18:00

This examination consists of eight basic questions (numbered 1–8) and three advanced (numbered A–C). There are no points awarded for the questions, but you can either give a correct answer, or fail.

Grading

The number of questions (basic plus advanced) that you need to answer correctly in order to get a certain grade is shown in the following table:

Basic questions	Advanced questions	Final grade
≥ 5	—	3/G
≥ 6	≥ 1	4/VG
≥ 7	≥ 2	5

Note: the threshold for basic questions has been lowered by 1.


Accessories


- Paper and pencil.
- Crayons, paper glue, scissors.
- One A4 cheat sheet with any information you want on it.
- No books or calculators.

Notes

- Answer directly on the question page, but you can also use empty papers if you run out of space.
- **Write readable, and explain your answers!**

1 Treasure hunt (state space)

Imagine a treasure hunter agent () who wishes to collect gold coins (③) in a maze like the one shown below. The agent is not directional and can move one step in any direction (**n, s, e, w**) at any time step, as long as there is no wall in the way. The gold coins do not move. The agent's goal is to find a plan for collecting all coins using as few moves as possible. Assume that the grid has size $M \times N$ and there are 4 coins in the maze.



Give a suitable representation of the states in this searching problem.

Answer:

$$\langle m, n, g_1, g_2, g_3, g_4 \rangle$$

where $1 \leq m \leq M$, $1 \leq n \leq N$ (representing the position of the agent),

and $g_1, g_2, g_3, g_4 \in \{\text{true}, \text{false}\}$ are boolean values (telling whether a gold coin has been collected or not).

What is the size of the state space?

Answer:

$$M \times N \times 2^4$$

(we have to know if each gold coin has been picked or not, which gives us a binary feature for each coins, i.e. 2^4 different possibilities)

Write your answers directly on the exam, but you can also use extra papers if you run out of space.

Write readable, and don't forget to explain your answers!

2 Treasure hunt (heuristics)

This is a continuation of question 1.

Below are seven possible heuristics for the same searching problem in the previous question, where a denotes the agent, G is a set consisting of the gold coins that have not been collected yet, and $d(x, y)$ is the Manhattan distance between x and y , i.e., the sum of the horizontal and the vertical distance between x and y .

- $h_1 = \min_{g \in G} d(a, g)$ = the minimum Manhattan distance from the agent to any remaining gold coin
- $h_2 = \max_{g \in G} d(a, g)$ = the maximum Manhattan distance from the agent to any remaining gold coin
- $h_3 = \sum_{g \in G} d(a, g)$ = the sum of all Manhattan distances from the agent to the remaining gold coins
- $h_4 = \max_{g, g' \in G} d(g, g')$ = the maximum Manhattan distance between any two remaining gold coins
- $h_5 = h_1 + h_4$
- $h_6 = h_2 + h_4$
- $h_7 = h_3 + h_4$

Which ones of these heuristics are admissible? (Hint: it's more than one, but not all)

Answer:

The following are admissible:

- h_1, h_2 (the agent needs to get to the all coins, including the one closest/farthest away)
- h_4 (the agent needs to find some route between all coins, e.g., between the two being farthest apart)
- h_5 (the agent needs to get to some coin (e.g., the closest), and between the two being farthest apart)

The following are *not* admissible:

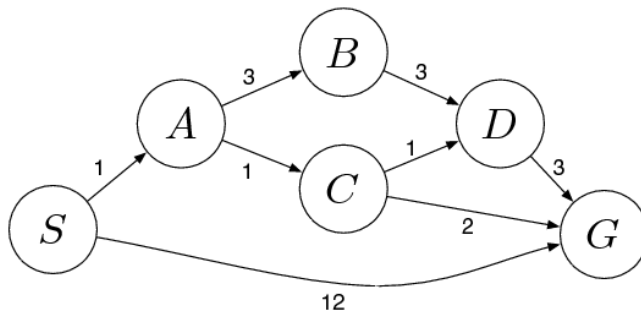
- h_3 (counterexample: if all coins are very close to each other and the agent is far away)
- h_6 (counterexample: if there are two coins left, and they are far apart, and the agent is close to one)
- h_7 (since h_3 is not admissible)

Write your answers directly on the exam, but you can also use extra papers if you run out of space.

Write readable, and don't forget to explain your answers!

3 Cost-based search

The following is a representation of a search problem, where S is the start node and G is the goal. There is also a heuristics h which is defined in the table.



n	$h(n)$
S	3
A	2
B	1
C	4
D	2
G	0

Assume that you are in the middle of a search and the current frontier is $F = \{B, C, G\}$, and you are about to select the next node from F to expand.

Which node will be expanded next, assuming that you are using...

- ...lowest-cost-first search (also known as uniform-cost search)?

Answer: C

- ...greedy best-first search?

Answer: G

(some of you noted that we couldn't even get to this state if we used best-first search from the beginning, but we can always assume that we have used another search strategy until now)

- ...A* search?

Answer: B

Write your answers directly on the exam, but you can also use extra papers if you run out of space.

Write readable, and don't forget to explain your answers!

4 Rolling the dice

Assume that you have two variables, A and B , both with domain $\{1, 2, 3, 4, 5, 6\}$. The constraints on the values are that $A < B$ and $A + B = 5$.

Draw the constraint graph.

Answer:

(left as an exercise:)

**Update 2018-02-06: This answer is wrong!
It treats $A < B$ and $A + B = 5$ as different arcs,
resulting in the wrong answer!**

Perform arc consistency on the graph.

Answer:

We start with **TDA** containing all four arcs, and $A, B \in \{1, 2, 3, 4, 5, 6\}$. Here is one possible run of the AC algorithm:

- Select the arc $\langle A, A < B \rangle$ from **TDA**, prune away 6 from the domain of A , resulting in $A \in \{1, 2, 3, 4, 5\}$.
- Select $\langle B, A < B \rangle$ from **TDA**, prune away 1 from the domain of B , resulting in $B \in \{2, 3, 4, 5, 6\}$.
- Select $\langle A, A + B = 5 \rangle$ from **TDA**, prune away 4, 5 from the domain of A , resulting in $A \in \{1, 2, 3\}$. Add back $\langle B, A < B \rangle$ to **TDA**.
- Select $\langle B, A + B = 5 \rangle$ from **TDA**, prune away 1, 2 from the domain of B , resulting in $B \in \{3, 4\}$. Add back $\langle A, A < B \rangle$ to **TDA**.
- Select $\langle A, A < B \rangle$ from **TDA**, nothing is pruned. The same with $\langle B, A < B \rangle$.
- Now **TDA** is empty, and the graph is arc consistent.

You don't have to be this explicit to get a point on this question – it's enough if you just say which arcs are selected and what values are pruned.

Write your answers directly on the exam, but you can also use extra papers if you run out of space.

Write readable, and don't forget to explain your answers!

5 Proving in a knowledge base

Consider the following knowledge base:

$$\begin{array}{ll} a \leftarrow b \wedge c \wedge f & d \leftarrow c \wedge f \\ b \leftarrow c \wedge e & e \leftarrow d \wedge g \\ b \leftarrow d \wedge c & f \\ c & g \leftarrow e \wedge c \end{array}$$

Is a a logical consequence?

Either prove it using the top-down or bottom-up proof procedure, or explain why it is not a consequence.

Answer:

Note, the ones below are just examples – there are several different possible orders that the rules can be applied.

Bottom-up:

$$\begin{array}{ll} & \{c, f\} \\ d \leftarrow c \wedge f & \Rightarrow \{c, d, f\} \\ b \leftarrow d \wedge c & \Rightarrow \{b, c, d, f\} \\ a \leftarrow b \wedge c \wedge f & \Rightarrow \{a, b, c, d, f\} \end{array}$$

Top-down:

$$\begin{array}{ll} & ?\{a\} \\ a \leftarrow b \wedge c \wedge f & \Rightarrow ?\{b, c, f\} \\ b \leftarrow d \wedge c & \Rightarrow ?\{c, d, f\} \\ c & \Rightarrow ?\{d, f\} \\ d \leftarrow c \wedge f & \Rightarrow ?\{c, f\} \\ c & \Rightarrow ?\{f\} \\ f & \Rightarrow ?\{\} \end{array}$$

Write your answers directly on the exam, but you can also use extra papers if you run out of space.

Write readable, and don't forget to explain your answers!

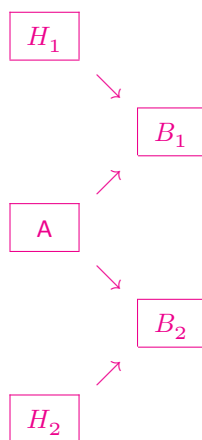
6 Abdul Alhazred the psychic: Bayesian network

Abdul Alhazred (AA) claims that he is psychic and can always predict a coin toss. Let $P(A) = p_0 = 0.1$ be your prior belief that AA is a psychic, and let B_k denote the event that AA predicts the k -th coin toss correctly. In all questions about Abdul the psychic, make the following assumptions:

1. All experiments are conducted with a fair coin, whose probability of coming heads at the k -th toss is $P(H_k) = \frac{1}{2}$ and where H_k is independent of H_{k-1}, \dots, H_1 .
2. Your utility for money is linear, i.e. $U(x) = x$ for any amount of money x .

What are the dependencies between A, H_1, B_1, H_2 and B_2 ? Draw a Bayesian network to represent them.

Answer:



Explanation: H_1 and H_2 are independent of everything.

A is also independent, since it is your *prior* belief $p_0 = 0.1$. I.e., your belief before anything has happened, and this can't depend on things that will happen in the future.

B_2 does not depend on B_1 , but instead both depends on A . B_2 is the event that AA predicts the second coin correctly, assuming that we don't know anything about the result of the first coin toss.

Write your answers directly on the exam, but you can also use extra papers if you run out of space.

Write readable, and don't forget to explain your answers!

7 Abdul the psychic: Marginal probabilities

This is a continuation of question 6. In short: $P(A) = p_0 = 0.1$ is your prior belief that AA is a psychic. B_k is the event that AA predicts the k -th coin toss correctly. The probability of the coin coming heads at the k -th toss is $P(H_k) = \frac{1}{2}$, where H_k is independent of H_{k-1}, \dots, H_1 . Your utility for money is linear, $U(x) = x$.

What is the marginal probability $P(B_1)$?

Answer:

Note that $P(B_k|A) = 1$, i.e., when A is true B_k is true. Otherwise, if A is false, then, as the coin is fair, $P(B_k|\neg A) = \frac{1}{2}$. Consequently, for any k ,

$$\begin{aligned} P(B_k) &= P(B_k|A)P(A) + P(B_k|\neg A)(1 - P(A)) \\ &= 1 \cdot p_0 + \frac{1}{2} \cdot (1 - p_0) \\ &= \frac{p_0 + 1}{2} \\ &= \frac{11}{20} \end{aligned}$$

What is the marginal probability $P(B_2)$?

Answer:

The same as above

Write your answers directly on the exam, but you can also use extra papers if you run out of space.

Write readable, and don't forget to explain your answers!

8 Abdul the psychic: Conditional probabilities

This is a continuation of question 6. In short: $P(A) = p_0 = 0.1$ is your prior belief that AA is a psychic. B_k is the event that AA predicts the k -th coin toss correctly. The probability of the coin coming heads at the k -th toss is $P(H_k) = \frac{1}{2}$, where H_k is independent of H_{k-1}, \dots, H_1 . Your utility for money is linear, $U(x) = x$.

Now assume that AA predicts the first coin toss correctly, i.e. B_1 holds.

What is the marginal probability $P(B_2|B_1)$?

Answer:

We repeat the previous exercise, but we now replace $P(A)$ with the posterior,

$$P(A|B_1) = \frac{P(B_1|A)P(A)}{P(B_1)} = \frac{1 \cdot p_0}{(p_0 + 1)/2} = \frac{2p_0}{p_0 + 1}$$

So now:

$$\begin{aligned} P(B_2|B_1) &= P(B_2|A)P(A|B_1) + P(B_2|\neg A)(1 - P(A|B_1)) \\ &= 1 \cdot \frac{2p_0}{p_0 + 1} + \frac{1}{2} \cdot \left(1 - \frac{2p_0}{p_0 + 1}\right) \\ &= \frac{3p_0 + 1}{2p_0 + 2} \\ &= \frac{13}{22} \end{aligned}$$

Write your answers directly on the exam, but you can also use extra papers if you run out of space.

Write readable, and don't forget to explain your answers!

A [Advanced] Abdul the psychic: Betting

This is the final continuation of question 6. In short: $P(A) = p_0 = 0.1$ is your prior belief that AA is a psychic. B_k is the event that AA predicts the k -th coin toss correctly. The probability of the coin coming heads at the k -th toss is $P(H_k) = \frac{1}{2}$, where H_k is independent of H_{k-1}, \dots, H_1 . Your utility for money is linear, $U(x) = x$.

At the beginning of the experiment, AA bets you 100€ that he can predict the next four coin tosses, i.e. he is willing to give you 100€ if he doesn't predict all four tosses.

How much are you willing to bet against, i.e., how much are you willing to pay if he predicts them correctly?

Answer:

Let B^4 denote 4 correct predictions in a row and let v be the amount of money that we bet. Then, the expected utility is

$$\begin{aligned} \mathbf{E}(U) &= \mathbf{E}(U|B^4)P(B^4) + \mathbf{E}(U|\neg B^4)(1 - P(B^4)) \\ &= U(-v)P(B^4) + U(100)(1 - P(B^4)) \\ &= -vP(B^4) + 100(1 - P(B^4)) \\ &= 100 - (v + 100)P(B^4) \end{aligned}$$

We have that

$$\begin{aligned} P(B^4) &= P(B^4|A)P(A) + P(B^4|\neg A)(1 - P(A)) \\ &= 1 \cdot p_0 + \left(\frac{1}{2}\right)^4(1 - p_0) \\ &= \frac{15p_0 + 1}{16} \\ &= \frac{2.5}{16} = \frac{5}{32} \end{aligned}$$

In order for our gamble to be profitable, our expected utility must be positive, so

$$\begin{aligned} \mathbf{E}(U) &\geq 0 \\ v \cdot P(B^4) &\leq 100(1 - P(B^4)) \\ v \cdot \frac{15p_0 + 1}{16} &\leq 100\left(\frac{15 - 15p_0}{16}\right) = \frac{1500}{16}(1 - p_0) \\ v \cdot (15p_0 + 1) &\leq 1500(1 - p_0) \\ v &\leq \frac{1500(1 - p_0)}{15p_0 + 1} = \frac{1500 - 150}{2.5} = 540\text{€} \end{aligned}$$

Write your answers directly on the exam, but you can also use extra papers if you run out of space.

Write readable, and don't forget to explain your answers!

B [Advanced] Rob, the coffee delivery robot

Rob is a coffee delivery robot who lives in a world with three locations: a coffee shop (*cs*), a laboratory (*lab*), and Sam's office (*off*). Rob can pick up coffee (*puc*) at the coffee shop, move (*mc/mcc*), and deliver coffee (*dc*). Delivering the coffee to Sam's office will stop Sam from wanting coffee. Assume that we represent the planning problem with two boolean features (*rhc* – "rob has coffee", and *swc* – "Sam wants coffee"), and one three-valued feature (*rloc* – "Rob's location"). Then the actions can be defined like this:

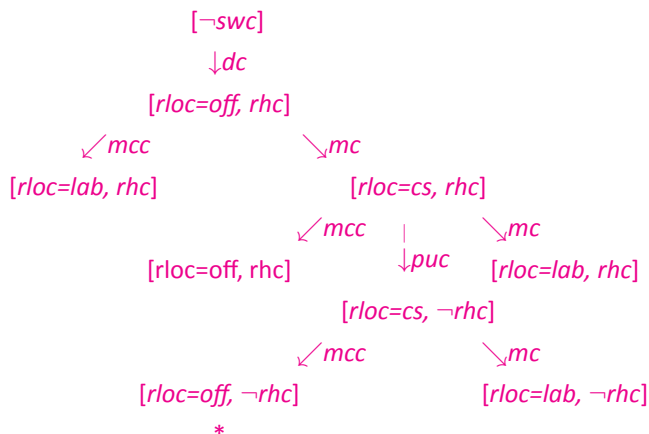
Action	<i>mc</i> (move clockwise)			Action	<i>puc</i> (pick up coffee)
Precondition	[<i>rloc=cs</i>]	[<i>rloc=off</i>]	[<i>rloc=lab</i>]	Precondition	[<i>rloc=cs</i> , \neg <i>rhc</i>]
Effect	[<i>rloc=off</i>]	[<i>rloc=lab</i>]	[<i>rloc=cs</i>]	Effect	[<i>rhc</i>]

Action	<i>mcc</i> (move counterclockwise)			Action	<i>dc</i> (deliver coffee)
Precondition	[<i>rloc=off</i>]	[<i>rloc=lab</i>]	[<i>rloc=cs</i>]	Precondition	[<i>rloc=off</i> , <i>rhc</i>]
Effect	[<i>rloc=cs</i>]	[<i>rloc=off</i>]	[<i>rloc=lab</i>]	Effect	[\neg <i>rhc</i> , \neg <i>swc</i>]

Assume that the start state is [*rloc=off*, \neg *rhc*, *swc*]. How does a regression planner solve the goal [\neg *swc*]?

You do not have to draw the entire search tree (which is infinite anyway), but you should at least show all possible choice points that the planner has to go through and what choices it has to make in order to find a solution. Also, describe the search state at each choice point.

Answer:



Write your answers directly on the exam, but you can also use extra papers if you run out of space.

Write readable, and don't forget to explain your answers!

C [Advanced] A chain of variables

Assume that you have a chain of n variables X_1, \dots, X_n , each with the domain $\{1, \dots, m\}$, where $n \leq m$. The chain should be in ascending order, meaning that $X_i < X_{i+1}$ for all $1 \leq i < n$.

What will the resulting domains of variables X_1, \dots, X_n be, after arc consistency has been enforced?

Answer:

$$X_i \in \{i, \dots, i + m - n\}$$

E.g., for $n = 3$ and $m = 5$ we get $X_1 \in \{1, 2, 3\}$, $X_2 \in \{2, 3, 4\}$ and $X_3 \in \{3, 4, 5\}$.